

FINAL TEST

A. Fill in the gaps with the right word. In some cases the first/last letter(s) are given. (15x1)

- The Capricorn makes a speed of 14 _____.
- He comes from Ireland; He is _____.
- You need a c_____ to lift and move the cargo.
- The anchor w_____ handles the anchor, and in some cases the m_____ ing ropes.
- You can s_____ containers on the main deck.
- The escape _____ is situated between the ventilation areas in the upper deck.
- S_____ the goods carefully in the cargo hold.
- The whole body of the ship is called the _____.
- In some emergency situations you have to carry your breathing _____.
- A collision b_____ is a watertight partition near the bow for keeping out water in the event of collision.
- A propeller is a device with twisted b_____ that rotate.
- When you are in a car or a plane you must _____ your seatbelt.
- When there is a man overboard you should drop a _____ to the sea.
- The external d_____ s of a TEU container are 8x8x20 feet.

B. Write the names of the vessels that do the following: (10x0.5)

- It carries liquefied natural gas: _____
- It transfers the pilot to the ship: _____
- It carries passengers and cars: _____
- It carries any type of cargo in "boxes": _____
- It carries dry loose cargo such as grain, iron, ore etc.: _____
- It carries liquid loose cargo such as crude oil, diesel oil, etc.: _____
- It carries vehicles: _____
- It carries refrigerated cargo: _____
- It tows other vessels: _____
- It crushes a way through ice: _____

C. Supply the right derivatives of the words in parentheses (12x0.5)

- They found 3 _____ (stow) hiding in the hold.
- All crew and passengers go to the _____ (embark) deck.
- The _____ (wide) of the vessel is 20 metres and the overall _____ (long) is 200 metres.
- There were serious mechanical problems because of bad _____ (maintain).
- When a crude oil tanker is damaged by _____ (collide) or grounding, the _____ (leak) of oil into the sea can destroy the environment.
- There is a _____ (vary) of hatch covers.
- We need to make precise _____ (measure), and make _____ (adjust).
- What is the _____ (thick) of the wall?
- There was a _____ (reduce) in the price of petrol last week.

D. Supply an appropriate synonym (10x0.5)

- Personnel _____
- Operation _____
- Adequate _____
- Reduce _____
- Support _____
- Grease _____
- Unload _____
- Drain _____
- Bow _____
- Huge _____

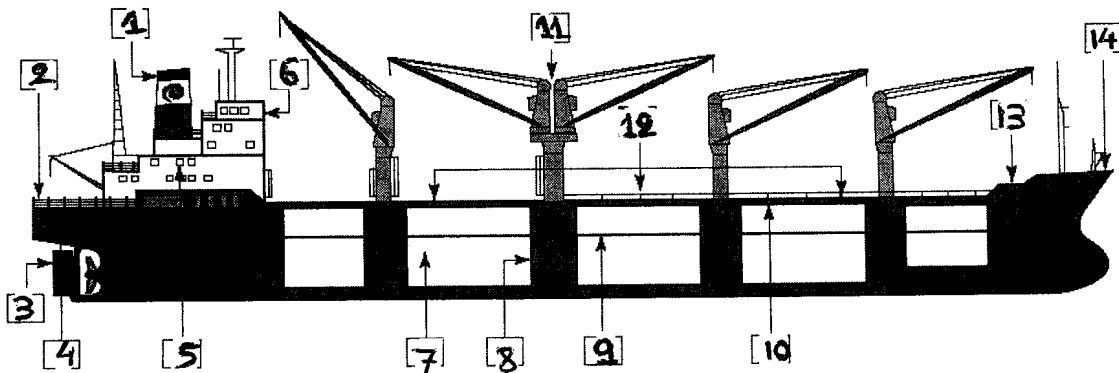
E. Supply the parts of the diesel engine that correspond to the following descriptions (10x1)

- The crankshaft rotates in it _____
- The lubricating oil is in here _____
- It reduces friction _____
- It reciprocates in the stuffing box _____
- The valves are fitted in it _____
- The camshaft opens the valves with the help of this rod _____
- The crosshead slides on them _____
- It compresses the air _____
- It rotates and gives motion to the propeller _____
- It supports the whole engine _____

F. Supply the right word from the list for each number on the sketch (14x1)

Forecastle, bow, main deck, hatch covers, cargo holds, bulkheads, 'tween-decks, cranes, stern, superstructure, navigation bridge, funnels, poop deck, rudder











- | | |
|----------|-----------|
| 1. _____ | 8. _____ |
| 2. _____ | 9. _____ |
| 3. _____ | 10. _____ |
| 4. _____ | 11. _____ |
| 5. _____ | 12. _____ |
| 6. _____ | 13. _____ |
| 7. _____ | 14. _____ |








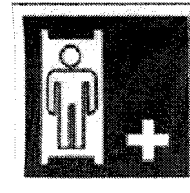




G. Write the names of the tools that do the following jobs (10x1=10)

- Drives in a nail _____
- Drives in a screw _____
- Cuts metal _____
- Cuts or beads wire _____
- Measures the diameter _____
- Loosens a nut _____
- Measures narrow gaps or clearances _____
- Marks the spot you will drill _____
- After you drill a hole it shapes and enlarges it _____
- Uses fuel gases and oxygen to cut metals _____

H. Write the name of each tool under the pictures (10x0.5)

				
_____	_____	_____	_____	_____
				
_____	_____	_____	_____	_____


I. Supply the correct word under each picture below (10x1)

				
_____	_____	_____	_____	_____
				
_____	_____	_____	_____	_____

J. Put the verbs in parentheses in the Simple Present tense (5x1)

- He always _____ (come) to work late.
- She _____ (not speak) French.
- _____ (they know) how to fix the damage?
- He _____ (ask) the Chief Engineer's advice every time there is a problem.
- How often _____ (you phone) your friends?

K. Write the correct terms on the picture (15x1)



Four-stroke Diesel engine